

Subject Code

2	0	3	3
---	---	---	---

STATE LEVEL ASSESSMENT(SA-1)

Session 2019 - 20

Class – 2

Subject :Mathematics English Medium (CBSE)

Time: 2 Hours

Total Marks

3	0
---	---

Student ID

--	--	--	--	--	--	--	--	--	--

Name of the Student _____

Name of the School _____

Obtained Marks (In figures)

--	--

 (In words) _____

Signature of the Head Master _____

Signature of the Invigilator _____

Only for Valuation Purpose

							PAPER CODE							
STUDENT CODE														

1	9	Signature and Seal of Centre Superintendent	Signature of Valuer
2	10		
3	11		
4	12		
5	13		
6	14		
7	15		
8			
Total Marks Obtained			

Instructions:-

1. All Questions are compulsory. Each question carries 2 marks.
2. Answer of each question is to be written in this sheet only.
3. Teacher is instructed to read aloud each question and its options at a moderate pace. Do not give any hints while reading.

Q.1 Write the next number

2

2, 5, 8,

- (a) 3 (b) 4 (c) 6 (d) 11 **Ans : (d) 11**

Q.2 Fill in the blanks with the correct number :


2

$$5 + 5 + \boxed{} = 18$$

- (a) 6 (b) 7 (c) 8 (d) 5 **Ans : (c) 8**

Q.3 Tick the picture which looks long :

2



Q.4 How many pairs can be made?

2



(a) two pairs

(b) three pairs

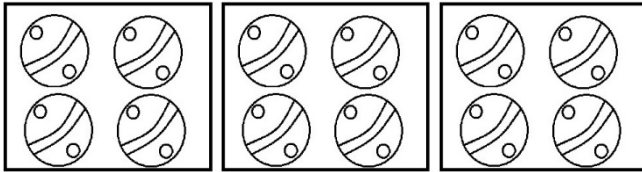
(c) one pair

(d) four pairs

Ans : **(d) four pairs**

Q.5 Each box contains four balls, how many balls are there in all?

2



(a) 4

(b) 8

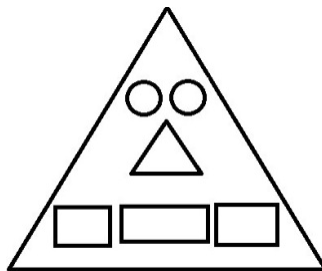
(c) 12

(d) 16

Ans: **(c) 12**

Q.6 How many (\triangle) triangles are there in the figure?

2



(a) 2

(b) 3


(c) 1

(d) 0


Ans : **(c) 1**

Q.7 From which pot can the bird drink water easily? Ans : **(b)**


2




(a)



(b)



(c)



(d)



Q.8 Which team has the largest number of members :

2

Team A = 35

Team B = 45

Team C = 62

Team D = 48

(a) team C

(b) team A

(c) team D

(d) team B Ans : **(a) team C = 62**

Q.9 Look at the calendar and tick the correct answer :

2

September 2019						
SUN	MON	TUE	WED	THU	FRI	SAT
1	2	3	4	5	6	7
8	9	10	11	12	13	14
15	16	17	18	19	20	21
22	23	24	25	26	27	28
29	30					

i. How many Wednesdays are there in the month?

(a) 4

(b) 5

(c) 3

(d) 1 Ans : **(a) 4**

ii. The last Saturday of the month is on

(a) 07th

(b) 14th

(c) 21st

(d) 28th Ans: **(d) 28th**

Q.10 i. Complete the patterns :

2

(a) 50 (b) 35 (c) 40 (d) 65 Ans : (c) 40

ii. PQ, RS, TU,

(a) VW (b) UV (c) XY (d) VZ Ans : (a) VW

Q.11 Fill the correct numbers in the box

2

i. 80 = tens Ones Ans

ii. 74 = tens ones

Q.12 How many rats?

2

(a) Ten rats + Seven rats = rats

(b) Five rats + Two rats = rats

Q.13 Write one or many.

2

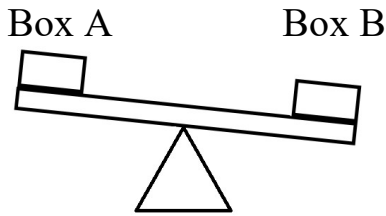
Ex. Sun one



(a) stars ..Ans : many



(b) teeth...:Ans : many

Q.14 Put a tick mark on what will you keep in box 'A'?

2



(a)  or  Ans: book

(b)  or  Ans: frog

Q.15 Which notes will we need to buy this frock?

2



(a) 

(b)  Ans : (b)

(c) 

(d) 